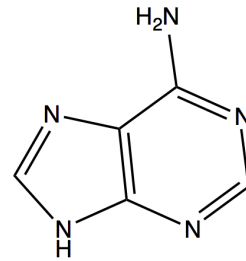
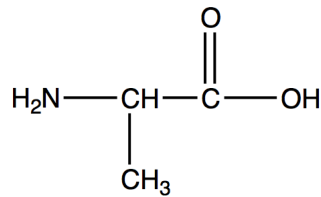
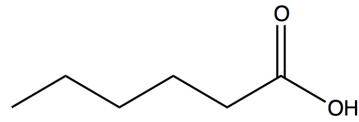
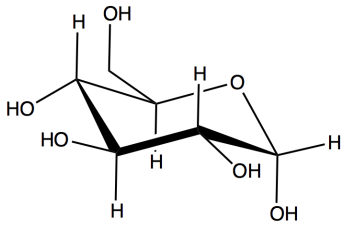


NAME: \_\_\_\_\_

January 17, 2013

Label each of the following biomolecules as a carbohydrate, nucleic acid, amino acid, or lipid. Circle and name four unique chemical functionalities.



NAME: \_\_\_\_\_

January 17, 2013

Label each of the following biomolecules as a carbohydrate, nucleic acid, amino acid, or lipid. Circle and name four unique chemical functionalities.

